

# 目录

## 第一单元 校园生活



1	老师辛苦了	2
	比厚薄	3
	比粗细	5
	比宽窄	7
	比轻重	10
2	校园标识	12
	认识图形(三)	13
	分类	16
◎	活动与练习	22
◎	我学会了	24

## 第二单元 个人生活



3	爱护牙齿	28
	得数是6的加法	29
	我知道	34
4	得数是7的加法	35

◎	活动与练习	40
◎	我学会了	42

## 第三单元 家庭生活



5	这里是我家	46
	得数是8的加法	47
6	尊老敬老过重阳	52
	得数是9的加法	53
◎	活动与练习	60
◎	我学会了	62

## 第四单元 社区生活



7	我是社区一分子	66
	得数是10的加法	67
8	保护社区环境	72
	10以内的连加	73
◎	活动与练习	78
◎	我学会了	80

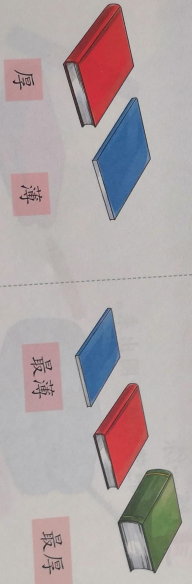


# 1 老师辛苦了



● 比

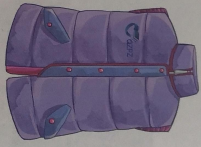
● 比厚薄






### 做一做

1. 比一比，哪件衣服薄，哪件衣服厚？



2. 比一比，哪个垫子最厚？



### 练一练

1. 把薄的被子圈出来。



2. 把

比粗

2. 把最厚的饼干圈出来。



比粗细




最粗

最细




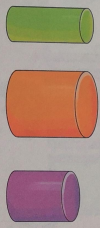
### 做一做

挑出一条粗细适当的绳子穿起下面的珠子。




### 目 练一练

1. 贴一贴，把下面的积木从粗到细排列。




2. 在最粗的树下面画“√”。



### 比宽窄



### 比宽窄




做一做

1. 比一比，哪扇门宽，哪扇门窄？



2. 贴一贴，把下面的丝带从宽到窄排列。



3. 试用宽窄不同的彩色纸条制作拉花。




练一练

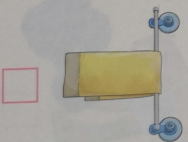
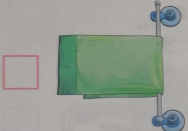
1. 把背带宽的书包圈出来。



2. 在宽的路下面画“√”。



3. 在最宽的毛巾下面画“√”，在最窄的毛巾下面画“○”。



● 比轻重



轻

重



最重

最轻

📌 做一做

1. 比一比，哑铃和沙锤哪个轻，哪个重？



2. 比一比，哪个最轻，哪个最重？

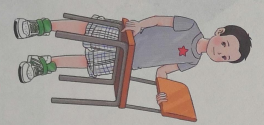
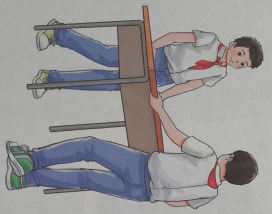


📌 练一练

1. 选出轻的球。



2. 比一比，在最轻的物品下面画“○”，在最重的物品下面画“□”。



## 2 校园标识



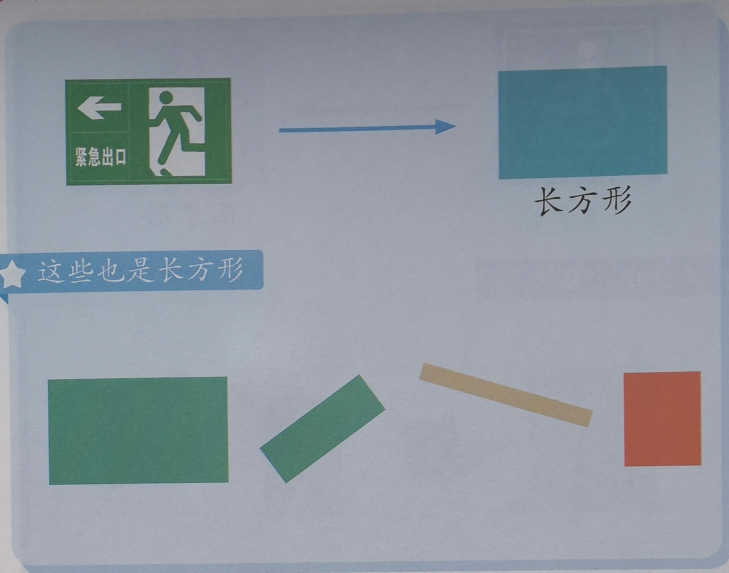
● 认识图


★ 这些也

做一  
找一



● 认识图形（三）



 做一做


找一找含有长方形的物品。



三角形

★ 这些也是三角形


做一做  
找一找含有三角形的物品。



正方形

★ 这些也是正方形


做一做  
找一找含有正方形的物品。




● 分类  
把下面的这些图形按照形状分类。




把下面的这些图形按照颜色分类。



3. 说一说，下面的图形可以怎样分类？



4. 找出不同形状的图形。



做一做

1. 说一说，校园里有哪些你认识的图形？





2. 画一画自己喜欢的图形。





## 活动与练习

 在操场上活动。



1. 说一说，天天和乐乐走的平衡木哪个宽，哪个窄？
2. 天天和乐乐是按照什么给积木分类的？你还有别的分类方法吗？

22




3. 指一指，玩跷跷板的两个人谁轻，谁重？
4. 在图中找一找三角形、正方形、长方形，和同学比一比谁找得多。


23

# 我学会了

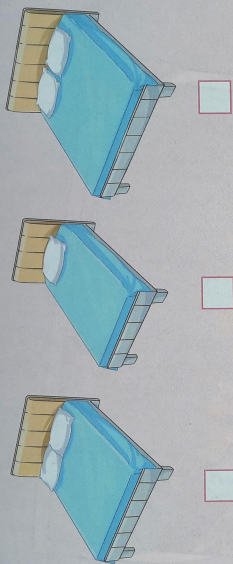
1. 涂一涂，给长方形涂上蓝色，给正方形涂上绿色，给三角形涂上黄色。



2. 试一试，放一放。




3. 在最宽的床下面画“√”，在最窄的床下面画“○”。




4. 把最厚的书圈出来。



5. 把小红花贴在最重的物品下面。



第二单元 个人生活



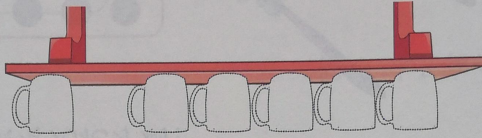
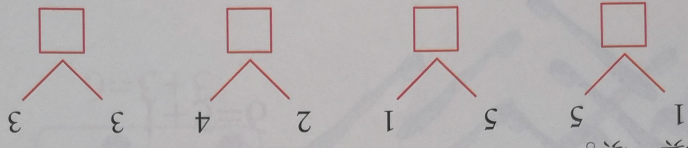




爱护牙齿

3

2. 填一填。



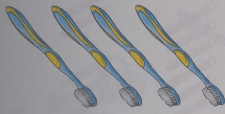
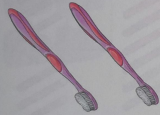
1. 贴一贴，数一数，数一数，架子上一共有几个？

做一做

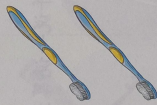
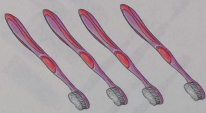
合一合

得数是6的加法

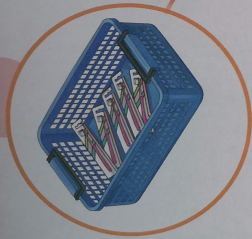
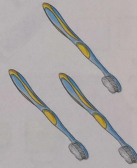
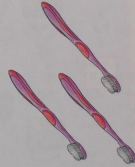
2. 一共有几把牙刷?



3. 一共有几把牙刷?




4. 一共有几把牙刷?



**?** 想一想

1. 一共有几把牙刷?



练一练

1. 数一数，填一填。

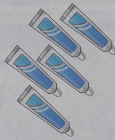


$$4 + 2 = \square$$



$$1 + 5 = \square$$

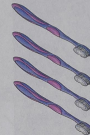
2. 看图完成算式。



$$5 + 1 = \square$$



$$2 + \square = \square$$



3. 算一算。

$$1 + 5 = \square$$

$$2 + 4 = \square$$

$$3 + 3 = \square$$



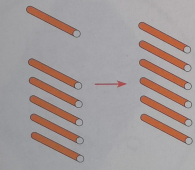
$$4 + 2 = \square$$

$$2 + 2 = \square$$

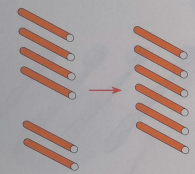
$$\square + \square = \square$$

做一做


1. 摆一摆，填一填。



$$5 + 1 = \square$$



$$2 + 2 = \square$$

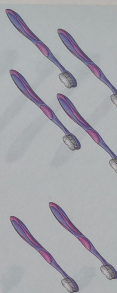


$$3 + 3 = \square$$

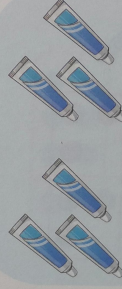
2. 看图完成算式，并说一说算式表示的含义。



$$1 + 5 = \square$$



$$2 + 4 = \square$$



$$3 + 3 = \square$$



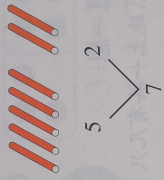
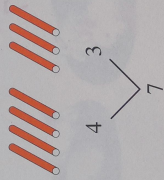
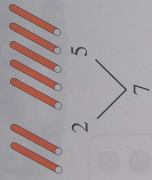
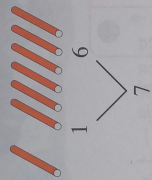
$$4 + 2 = \square$$

# 4 我想知道



得数是7的加法

合一合

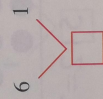


## 做一做


1. 贴一贴，数一数，地上一共有几只？



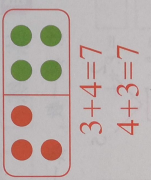
2. 填一填。



3. 地上一共有几只？



4. 地上一共有几只？



**做一做**

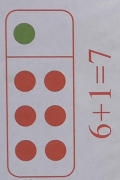

1. 摆一摆，填一填。

1 + 6 =



4 + 3 =

5 + 2 =

3. 地



4. 地




**做一做**

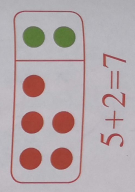
1. 摆

**想一想**

1. 地上一共有几只？



2. 地上一共有几只？



3. 看图完成算式。



$$3 + \square = \square$$



$$4 + \square = \square$$

4. 算一算。

$$6 + 1 = \square$$

$$5 + 2 = \square$$


$$4 + 3 = \square$$

$$1 + 6 = \square$$


$$2 + 5 = \square$$

$$3 + 4 = \square$$

5. 送动物回家。



2. 看图完成算式，并说一说算式表示的含义。



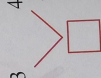
$$4 + 3 = \square$$



$$2 + 5 = \square$$

练一练

1. 数一数，填一填。



2. 填一填。



3. 看图



4. 算一

$$6 + \square$$

$$1 + \square$$

5. 送动物



3. 看图完成算式。



$$3 + \square = \square$$



$$4 + \square = \square$$

4. 算一算。

$$6 + 1 = \square$$

$$5 + 2 = \square$$


$$4 + 3 = \square$$

$$1 + 6 = \square$$


$$2 + 5 = \square$$

$$3 + 4 = \square$$

5. 送动物回家。



# 活动与练习

 在公园里游玩。



1. 数一数，电瓶车上有几个大人，几个小朋友？

2. 算一算，电瓶车上一共有几个人？

$$\square \bigcirc \square = \square$$



3. 数一数，旋转木马前有几个男生，几个女生？

4. 算一算，一共有几个人要坐旋转木马？

$$\square \bigcirc \square = \square$$




# 我学会了

1. 摆一摆，填一填。



$$\begin{array}{r} 2 \\ + 2 \\ \hline \square \end{array}$$



$$\begin{array}{r} 5 \\ + 2 \\ \hline \square \end{array}$$

2. 看图完成算式。

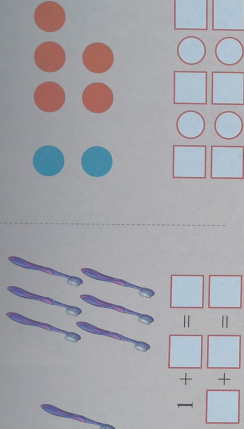
$5 + 1 = \square$

$1 + 5 = \square$



$3 + 4 = \square$

$4 + 3 = \square$



$$\begin{array}{r} 1 \\ + \square \\ \hline \square \end{array}$$

$$\begin{array}{r} \square \\ + \square \\ \hline \square \end{array}$$

3. 算一算。

$1 + 5 = \square$

$2 + 4 = \square$

$1 + 6 = \square$

$2 + 5 = \square$

$3 + 4 = \square$

$5 + 1 = \square$

$4 + 2 = \square$

$6 + 1 = \square$

$5 + 2 = \square$



$4 + 3 = \square$

$3 + 3 = \square$

$6 + 0 = \square$

4. 把相加得数是6的两个数相连。





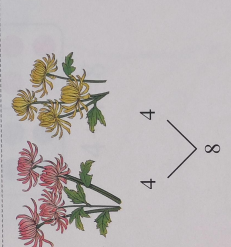


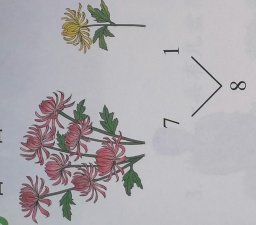
# 5 这里是我家

5




得数是8的加法

合一合



做一做

1. 贴一贴，数一数，树上  
一共有几片树叶？



2. 填一填。


$$\begin{array}{c} \square \\ \swarrow \quad \searrow \\ 3 \quad 5 \end{array}$$

$$\begin{array}{c} \square \\ \swarrow \quad \searrow \\ 6 \quad 2 \end{array}$$

$$\begin{array}{c} \square \\ \swarrow \quad \searrow \\ 4 \quad 4 \end{array}$$

$$\begin{array}{c} \square \\ \swarrow \quad \searrow \\ 1 \quad 7 \end{array}$$


2. 地上一共有几盆花?



$$5+3=8$$

$$3+5=8$$

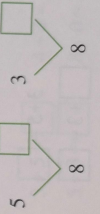
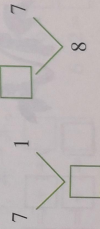
3. 地上一共有几盆花?




$$4+4=8$$

**做一做**

1. 摆一摆，填一填。



$$7+1=8$$



**想一想**

1. 地上一共有几盆花?



$$6+2=8$$

$$2+6=8$$

2. 看图完成算式。



$$2 + 6 = \square$$

$$6 + 2 = \square$$



$$1 + 7 = \square$$

$$7 + 1 = \square$$




$$3 + 5 = \square$$

$$\square + \square = \square$$




$$6 + 1 = \square$$

$$\square + \square = \square$$



$$\square + \square = \square$$

$$\square + \square = \square$$



$$\square + \square = \square$$

3. 算一算。

$$7 + 1 = \square$$

$$1 + 7 = \square$$

$$3 + 5 = \square$$

$$5 + 3 = \square$$

$$2 + 6 = \square$$

$$6 + 2 = \square$$


$$4 + 4 = \square$$

$$8 + 0 = \square$$

2. 看图完成算式，并说一说算式表示的含义。



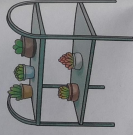
$$1 + 7 = \square$$



$$7 + 1 = \square$$



$$3 + 5 = \square$$



$$5 + 3 = \square$$

练一练


1. 数一数，填一填。



$$6 + 2 = \square$$




$$4 + 4 = \square$$



$$3 + 5 = \square$$

$$\square + 3 = \square$$



$$7 + \square = \square$$

$$\square + \square = \square$$

得 行

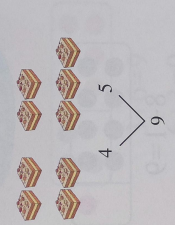
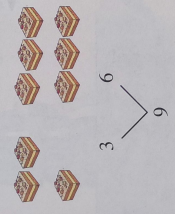
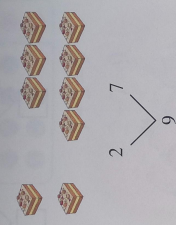
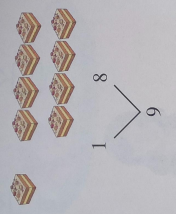
信 1

# 6 尊老敬老过重阳



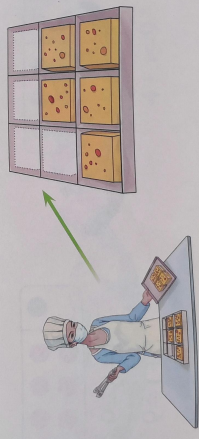
得数是9的加法

合一合

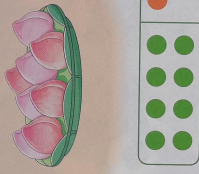
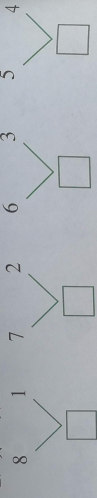


做一做

1. 贴一贴，数一数，盒子里一共有几块糕点？



2. 填一填。



$$8 + 1 = 9$$

**?** 想一想

1. 托盘上一共有几个桃子?



$$1 + 8 = 9$$

$$8 + 1 = 9$$



2. 托盘上一共有几个桃子?



$$7 + 2 = 9$$

$$2 + 7 = 9$$

3. 托盘上一共有几个桃子?



$$3 + 6 = 9$$

$$6 + 3 = 9$$

4. 托盘上一共有几个桃子?




$$5 + 4 = 9$$

$$4 + 5 = 9$$



$1 + 8 = \square$

$8 + 1 = \square$

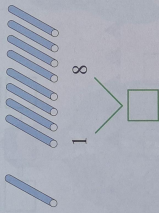


$7 + 2 = \square$

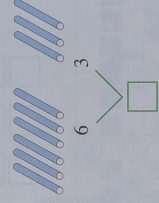
$2 + 7 = \square$

**练一练**

1. 数一数，填一填。



$1 + 8 = \square$



$6 + 3 = \square$

2. 填一填。

$2 + 7 = \square$

$5 + 4 = \square$

$8 + 1 = \square$

3. 看图完成算式。



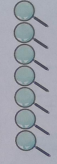
$8 + 1 = \square$

$1 + 8 = \square$



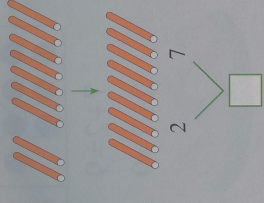
$2 + \square = 9$

$\square + 2 = 9$

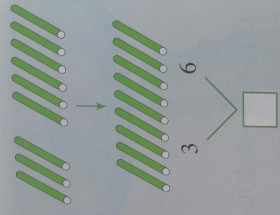


**做一做**

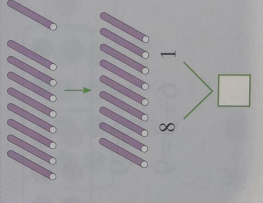
1. 摆一摆，填一填。



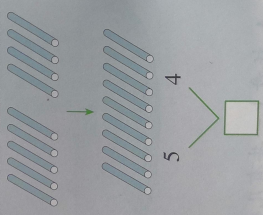
$2 + 7 = \square$



$3 + 6 = \square$



$8 + 1 = \square$



$5 + 4 = \square$

2. 看图完成算式，并说一说算式表示的含义。



$4 + 5 = \square$

$5 + 4 = \square$



$6 + 3 = \square$



$3 + 6 = \square$



5. 算一算。

$$6+1 = \square$$

$$7+1 = \square$$

$$5+4 = \square$$

$$6+3 = \square$$

$$6+2 = \square$$

$$5+2 = \square$$

$$3+5 = \square$$

$$4+3 = \square$$


$$2+7 = \square$$

$$2+5 = \square$$

$$1+8 = \square$$

$$4+4 = \square$$

6. 花儿送给谁？请你连一连。



$$\square + \square = \square$$

$$\square + \square = \square$$



$$3 + \square = \square$$

$$6 + \square = \square$$

5. 算  
6+1  
7+1  
5+4

6. 花



$$\square + \square = \square$$

$$\square + \square = \square$$



$$\square + \square = \square$$

$$\square + \square = \square$$



$$\square + \square = \square$$

$$\square + \square = \square$$



$$\square + \square = \square$$

$$\square + \square = \square$$

4. 想一想，填一填。

$$\square + \square = \square$$



# 活动与练习

和家人一起去公园。



1. 一共有几盆花?

$$\square + \square = \square$$

2. 路边一共有几棵?

$$\square + \square = \square$$

3. 一共有几只鸽子?

$$\square \bigcirc \square \square \square$$

4. 一共有几个气球?

$$\square \bigcirc \square \square \square$$



# 我学会了

1. 数一数，填一填。

1  $\begin{matrix} \square \\ + \\ \square \\ \hline \square \end{matrix}$  7  $\begin{matrix} \square \\ + \\ \square \\ \hline \square \end{matrix}$

2  $\begin{matrix} \square \\ + \\ \square \\ \hline \square \end{matrix}$  6  $\begin{matrix} \square \\ + \\ \square \\ \hline \square \end{matrix}$

3  $\begin{matrix} \square \\ + \\ \square \\ \hline \square \end{matrix}$  3  $\begin{matrix} \square \\ + \\ \square \\ \hline \square \end{matrix}$

4  $\begin{matrix} \square \\ + \\ \square \\ \hline \square \end{matrix}$  5  $\begin{matrix} \square \\ + \\ \square \\ \hline \square \end{matrix}$

2. 填一填。

1  $\begin{matrix} \square \\ + \\ \square \\ \hline 9 \end{matrix}$  2  $\begin{matrix} \square \\ + \\ \square \\ \hline 9 \end{matrix}$  3  $\begin{matrix} \square \\ + \\ \square \\ \hline 9 \end{matrix}$  4  $\begin{matrix} \square \\ + \\ \square \\ \hline 9 \end{matrix}$

8  $\begin{matrix} \square \\ + \\ \square \\ \hline 9 \end{matrix}$  7  $\begin{matrix} \square \\ + \\ \square \\ \hline 9 \end{matrix}$  6  $\begin{matrix} \square \\ + \\ \square \\ \hline 9 \end{matrix}$  5  $\begin{matrix} \square \\ + \\ \square \\ \hline 9 \end{matrix}$

3. 数一数，

$\begin{matrix} \square \\ + \\ \square \\ \hline \square \end{matrix}$   $\begin{matrix} \square \\ + \\ \square \\ \hline \square \end{matrix}$

4. 连一连。

7+1=  8  9

6+3=  8  9

5+3=  8  9

2+6=  8  9

5. 看图完成

一共有几朵花?  $\square + \square = \square$

一共有几块糕?  $\square + \square = \square$

3. 数一数，算一算。

$\begin{matrix} \square \\ + \\ \square \\ \hline \square \end{matrix}$   $\begin{matrix} \square \\ + \\ \square \\ \hline \square \end{matrix}$

$\begin{matrix} \square \\ + \\ \square \\ \hline \square \end{matrix}$   $\begin{matrix} \square \\ + \\ \square \\ \hline \square \end{matrix}$

4. 连一连。

7+1=  3+6=  5+4=

6+3=  7+2=  4+4=  8


5+3=  1+7=  1+8=  9

2+6=  0+8=  2+7=  9+0=

5. 看图完成算式。

一共有几朵花?  $\square + \square = \square$

一共有几块糕点?  $\square + \square = \square$



第四单元 社区生活

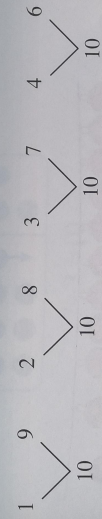


新春联欢会



得数是10的加法

合一合

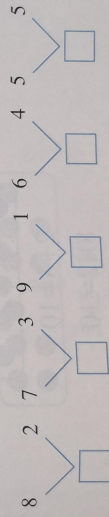


做一做

1. 贴一贴，数一数，窗户上一共有几个窗花？



2. 填一填。



# 7 我是社区一分子

## 欢度元旦



得数是

合一合





做一做

1. 贴一

2. 填一





$8+2=10$   
 $2+8=10$



1. 繩子上一共掛了几个灯笼?

想一想

$9+1=10$



4. 繩




3. 繩



2. 繩


2. 绳子上一共挂了几个灯笼?



$$7+3=10$$

$$3+7=10$$

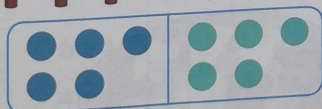
3. 绳子上一共挂了几个灯笼?



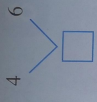
$$4+6=10$$

$$6+4=10$$

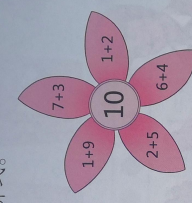

4. 绳子上一共挂了几个灯笼?



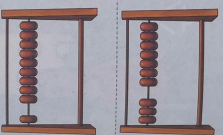
$$5+5=10$$



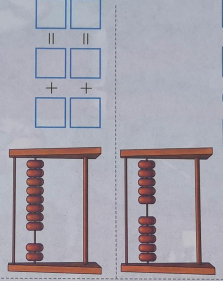
2. 照样子圈出得数是10的算式。



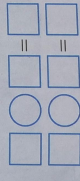
3. 看图完成算式。



$1 + 9 = \square = \square$   
 $9 + \square = \square$



$\square + \square = \square = \square$   
 $\square + \square = \square = \square$



$\square \bigcirc \square = \square = \square$   
 $\square \square = \square = \square$

4. 算一算。

$3 + 3 = \square$   
 $9 + 1 = \square$   
 $4 + 6 = \square$

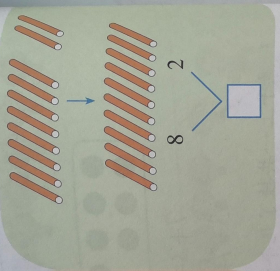
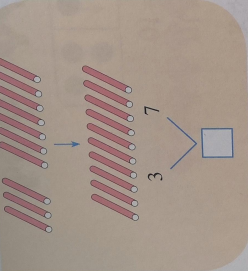
$6 + 4 = \square$   
 $4 + 2 = \square$   
 $5 + 5 = \square$

$3 + 7 = \square$   
 $2 + 8 = \square$   
 $7 + 3 = \square$


$2 + 5 = \square$   
 $1 + 9 = \square$   
 $8 + 2 = \square$

做一做


1. 摆一摆，填一填。



2. 看图完成算式，并说一说算式表示的含义。



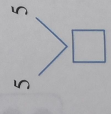
$1 + 9 = \square$   
 $9 + 1 = \square$




$6 + 4 = \square$   
 $4 + 6 = \square$

练一练

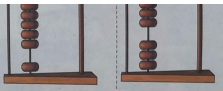
1. 贴一贴，填一填。



2. 照




3. 看



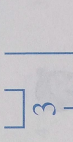
4. 3+  
9+  
4+



10 以内的连加



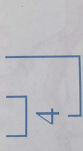
$$2+1+1=4$$



读作：2加1再加1等于4。



$$2+2+2=6$$



读作：2加2再加2等于6。

# 8 保护环境

8



2. 算一算。

$5+2+2=$



$2+3+4=$



$1+3+1=$



$4+2+2=$



### 练一练

1. 算一算。

$5+2+1=$

$1+4+4=$

$3+3+2=$

$2+3+5=$

$4+1+2=$

$5+1+2=$

$3+2+3=$

$6+1+1=$

$3+0+7=$

2. 看图完成算式。

+  +  =



### 做一做

1. 看图完成算式。



$1+2+3=$



$2+4+3=$

### 练

1.

$5+$


$2+$

$3+$

2.

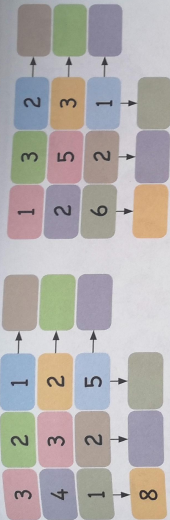


$3+1+1=$






$2+1+1=$

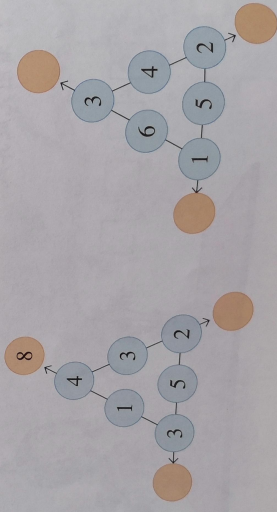
4. 照样子填一填。



5. 实践活动。



3. 照样子，把每条线上的三个数相加。



# 活动与练习

社区活动。



1. 一共有几盆花？

$$\square + \square = \square$$

2. 有几个人在社区活动中心帮忙？你能列出一个连加的算式并计算吗？

$$\square + \square + \square = \square$$



3. 图中有几个灯笼？你能用一个算式来表示吗？

$$\square + \square + \square = \square$$


4. 图中有几把椅子？请和同学交流你是怎样算的。

# 我学会了

1. 涂一涂，填一填。



$1 + 9 = \square$



$2 + \square = \square$



$\square + \square = \square$



$\square + \square = \square$

2. 看图完成算式。



$\square + \square = \square$



$\square + \square = \square$



$\square + \square = \square$



$\square + \square = \square$



$9 = \square$


3.

$\square = \square$



$\square + \square + \square = \square$

3. 连一连。



4. 算一算。

$5 + 5 = \square$

$4 + 3 = \square$

$2 + 2 + 4 = \square$

$1 + 9 = \square$

$7 + 2 = \square$

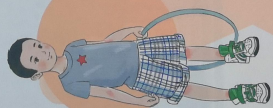
$4 + 2 + 3 = \square$

$7 + 3 = \square$

$2 + 8 = \square$

$3 + 6 + 1 = \square$

亲爱的同学们，给你们介绍四位好朋友，他们是天天、兰兰、贝贝和乐乐，让我们先来认识一下！



天天



兰兰




贝贝



乐乐

下面我们跟他们一起学习生活数学。  
让我们开始吧！



天天一家




兰兰一家



贝贝一家

乐乐一家



语文老师 体育老师 生活适应老师 音乐老师 数学老师